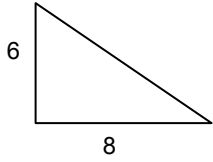


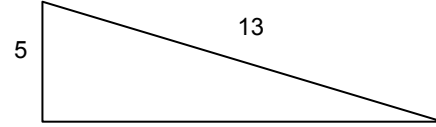
7th Math

Find the length of the missing side.

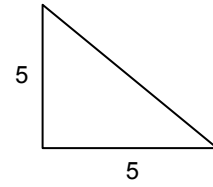
1.



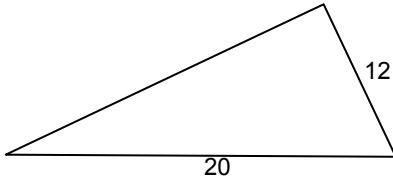
2.



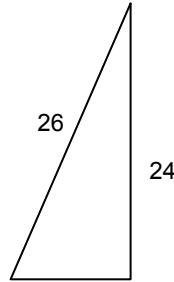
3.



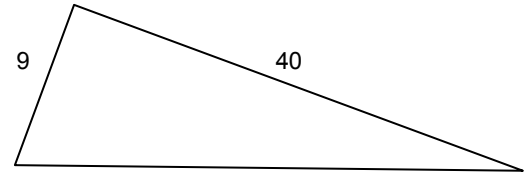
4.



5.



6.



Find the length of the missing side using the Pythagorean Theorem.

7. $a = 7$ and $b = 24$

8. $b = 9$ and $c = 15$

9. $a = 8$ and $c = 17$

10. $b = 3$ and $c = 5$

11. $a = 20$ and $c = 21$

12. $a = 20$ and $b = 21$

Each group of numbers represents the lengths of three sides of a triangle. Determine if the sides make a right triangle.

13. 9, 12, and 15

14. 2, 3, and 4

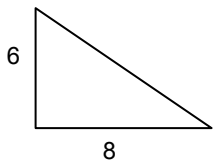
15. 9, 13, and 7

Pythagorean Theorem

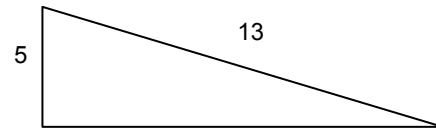
7th Math

Find the length of the missing side.

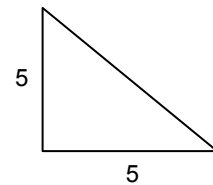
1.



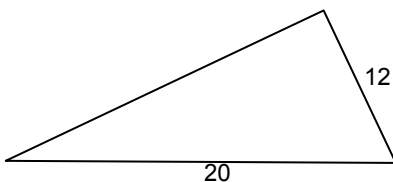
2.



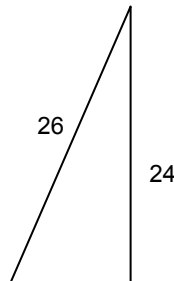
3.



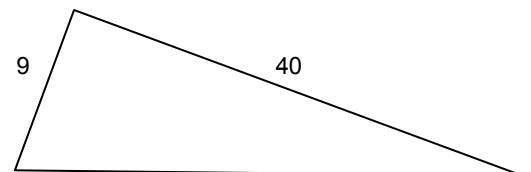
4.



5.



6.



Find the length of the missing side using the Pythagorean Theorem.

7. $a = 7$ and $b = 24$

8. $b = 9$ and $c = 15$

9. $a = 8$ and $c = 17$

10. $b = 3$ and $c = 5$

11. $a = 20$ and $c = 21$

12. $a = 20$ and $b = 21$

Each group of numbers represents the lengths of three sides of a triangle. Determine if the sides make a right triangle.

13. 9, 12, and 15

14. 2, 3, and 4

15. 9, 13, and 7